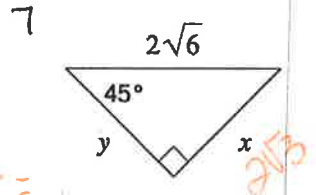
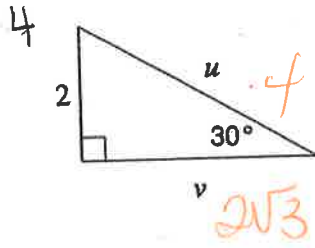
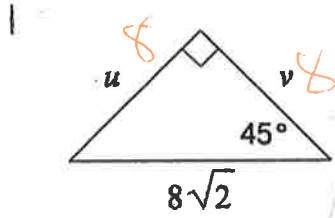


Name:

Special Right Triangle Practice



$$\frac{2\sqrt{6}}{\sqrt{2}} =$$

$$\frac{2\sqrt{12}}{2}$$

