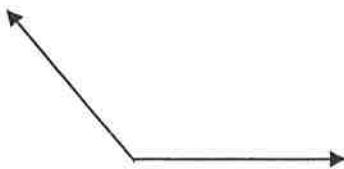


# Geometry: Constructions #1 - 6 Practice

Name: \_\_\_\_\_

1. Copy the angle



2. Perpendicular through the point



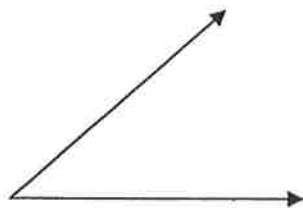
3. Bisect the segment



4. Perpendicular through the point



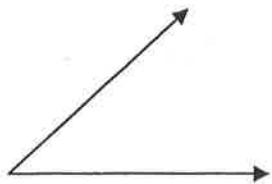
5. Bisect the angle



6. Copy the segment



7. Copy the angle



8. Perpendicular through the point



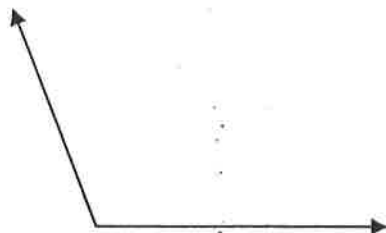
9. Bisect the segment



10. Perpendicular through the point



11. Bisect the angle



12. Copy the segment

