

Construct Two Parallel Lines (draw the line parallel through the given point)

A.



B.



C.



D.



Construct an Equilateral Triangle (use the segment as one side of the triangle)

A.



B.



C.

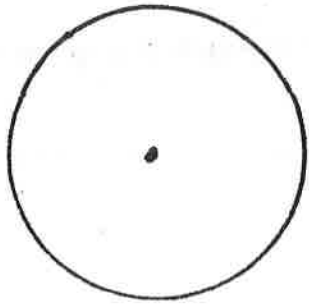


D.

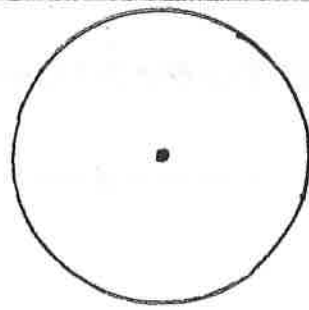


Construct a Square Inscribed in the Circle

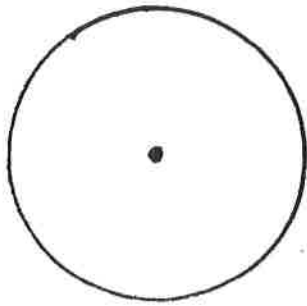
A.



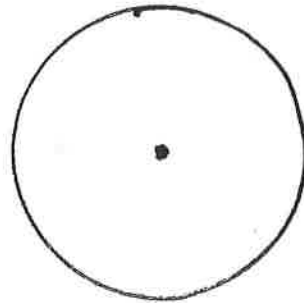
B.



C.

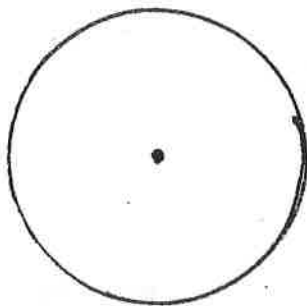


D.

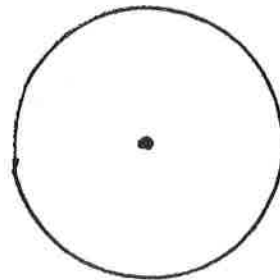


Construct a Hexagon Inscribed in the Circle

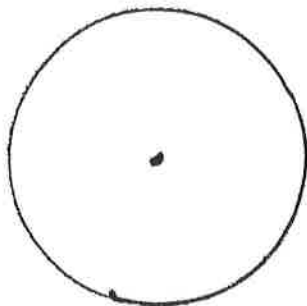
A.



B.



C.



D.

